


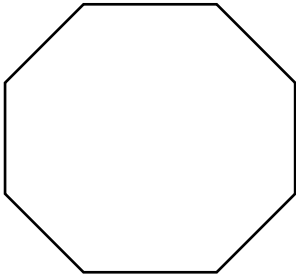




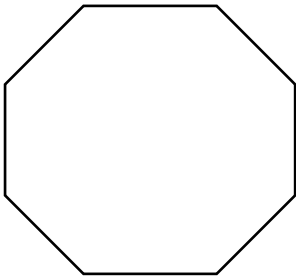


ESERCIZIO - Dividi in quarti questi interi (poi di ciascuno colora $\frac{1}{4}$)



<https://maestraglo.altervista.org>

ESERCIZIO - Dividi in quarti questi interi (poi di ciascuno colora $\frac{1}{4}$)



<https://maestraglo.altervista.org>